

- Q1.** Let $f(x) = \int_0^x t(t^2 - 9t + 20)dt$, $1 \leq x \leq 5$. If the range of f is $[\alpha, \beta]$, then $4(\alpha + \beta)$ equals :
- (1) 253 (2) 154
(3) 125 (4) 157
- Q2.** Let \hat{a} be a unit vector perpendicular to the vectors $\vec{b} = \hat{i} - 2\hat{j} + 3\hat{k}$ and $\vec{c} = 2\hat{i} + 3\hat{j} - \hat{k}$, and makes an angle of $\cos^{-1}(-\frac{1}{3})$ with the vector $\hat{i} + \hat{j} + \hat{k}$. If \hat{a} makes an angle of $\frac{\pi}{3}$ with the vector $\hat{i} + \alpha\hat{j} + \hat{k}$, then the value of α is :
- (1) $\sqrt{6}$ (2) $-\sqrt{6}$
(3) $-\sqrt{3}$ (4) $\sqrt{3}$
- Q3.** If for the solution curve $y = f(x)$ of the differential equation $\frac{dy}{dx} + (\tan x)y = \frac{2 + \sec x}{(1 + 2 \sec x)^2}$, $x \in (-\frac{\pi}{2}, \frac{\pi}{2})$, $f(\frac{\pi}{3}) = \frac{\sqrt{3}}{10}$, then $f(\frac{\pi}{4})$ is equal to :
- (1) $\frac{\sqrt{3}+1}{10(4+\sqrt{3})}$ (2) $\frac{5-\sqrt{3}}{2\sqrt{2}}$
(3) $\frac{9\sqrt{3}+3}{10(4+\sqrt{3})}$ (4) $\frac{4-\sqrt{2}}{14}$
- Q4.** Let P be the foot of the perpendicular from the point $(1, 2, 2)$ on the line $L : \frac{x-1}{1} = \frac{y+1}{-1} = \frac{z-2}{2}$. Let the line $\vec{r} = (-\hat{i} + \hat{j} - 2\hat{k}) + \lambda(\hat{i} - \hat{j} + \hat{k})$, $\lambda \in \mathbf{R}$, intersect the line L at Q. Then $2(PQ)^2$ is equal to :
- (1) 25 (2) 19
(3) 29 (4) 27
- Q5.** Let $A = [a_{ij}]$ be a matrix of order 3×3 , with $a_{ij} = (\sqrt{2})^{i+j}$. If the sum of all the elements in the third row of A^2 is $\alpha + \beta\sqrt{2}$, $\alpha, \beta \in \mathbf{Z}$, then $\alpha + \beta$ is equal to :
- (1) 280 (2) 224
(3) 210 (4) 168
- Q6.** Let the line $x + y = 1$ meet the axes of x and y at A and B, respectively. A right angled triangle AMN is inscribed in the triangle OAB, where O is the origin and the points M and N lie on the lines OB and AB, respectively. If the area of the triangle AMN is $\frac{4}{9}$ of the area of the triangle OAB and $AN : NB = \lambda : 1$, then the sum of all possible value(s) of λ is :
- (1) 2 (2) $\frac{5}{2}$
(3) $\frac{1}{2}$ (4) $\frac{13}{6}$
- Q7.** If all the words with or without meaning made using all the letters of the word "KANPUR" are arranged as in a dictionary, then the word at 440th position in this arrangement, is :
- (1) PRNAUK (2) PRKANU
(3) PRKAUN (4) PRNAKU
- Q8.** If the set of all $a \in \mathbf{R}$, for which the equation $2x^2 + (a - 5)x + 15 = 3a$ has no real root, is the interval (α, β) , and $X = \{x \in \mathbf{Z} : \alpha < x < \beta\}$, then $\sum_{x \in X} x^2$ is equal to :
- (1) 2109 (2) 2129
(3) 2119 (4) 2139
- Q9.** Let $A = [a_{ij}]$ be a 2×2 matrix such that $a_{ij} \in \{0, 1\}$ for all i and j . Let the random variable X denote the possible values of the determinant of the matrix A. Then, the variance of X is :

(1) $\frac{3}{4}$
(3) $\frac{3}{8}$

(2) $\frac{5}{8}$
(4) $\frac{1}{4}$

Q10. Let the function $f(x) = (x^2 + 1)|x^2 - ax + 2| + \cos|x|$ be not differentiable at the two points $x = \alpha = 2$ and $x = \beta$. Then the distance of the point (α, β) from the line $12x + 5y + 10 = 0$ is equal to :

(1) 5
(3) 3

(2) 4
(4) 2

Q11. Let the area enclosed between the curves $|y| = 1 - x^2$ and $x^2 + y^2 = 1$ be α . If $9\alpha = \beta\pi + \gamma$; β, γ are integers, then the value of $|\beta - \gamma|$ equals.

(1) 27
(3) 15

(2) 33
(4) 18

Q12. The remainder, when 7^{103} is divided by 23, is equal to :

(1) 6
(3) 9

(2) 17
(4) 14

Q13. If $\alpha x + \beta y = 109$ is the equation of the chord of the ellipse $\frac{x^2}{9} + \frac{y^2}{4} = 1$, whose mid point is $(\frac{5}{2}, \frac{1}{2})$, then $\alpha + \beta$ is equal to :

(1) 58
(3) 37

(2) 46
(4) 72

Q14. If the domain of the function $\log_5(18x - x^2 - 77)$ is (α, β) and the domain of the function $\log_{(x-1)}\left(\frac{2x^2+3x-2}{x^2-3x-4}\right)$ is (γ, δ) , then $\alpha^2 + \beta^2 + \gamma^2$ is equal to :

(1) 195
(3) 186

(2) 179
(4) 174

Q15. Let a circle C pass through the points $(4, 2)$ and $(0, 2)$, and its centre lie on $3x + 2y + 2 = 0$. Then the length of the chord, of the circle C , whose mid-point is $(1, 2)$, is :

(1) $\sqrt{3}$
(3) $2\sqrt{3}$

(2) $2\sqrt{2}$
(4) $4\sqrt{2}$

Q16. Let a straight line L pass through the point $P(2, -1, 3)$ and be perpendicular to the lines $\frac{x-1}{2} = \frac{y+1}{1} = \frac{z-3}{-2}$ and $\frac{x-3}{1} = \frac{y-2}{3} = \frac{z+2}{4}$. If the line L intersects the yz -plane at the point Q , then the distance between the points P and Q is :

(1) $\sqrt{10}$
(3) 2

(2) $2\sqrt{3}$
(4) 3

Q17. Bag 1 contains 4 white balls and 5 black balls, and Bag 2 contains n white balls and 3 black balls. One ball is drawn randomly from Bag 1 and transferred to Bag 2. A ball is then drawn randomly from Bag 2. If the probability, that the ball drawn is white, is $\frac{29}{45}$, then n is equal to :

(1) 6
(3) 5

(2) 3
(4) 4

Q18. Let $\alpha, \beta (\alpha \neq \beta)$ be the values of m , for which the equations $x + y + z = 1$; $x + 2y + 4z = m$ and $x + 4y + 10z = m^2$ have infinitely many solutions. Then the value of $\sum_{n=1}^{10} (n^\alpha + n^\beta)$ is equal to :

- (1) 3080 (2) 560
(3) 3410 (4) 440

Q19. Let $S = \mathbf{N} \cup \{0\}$. Define a relation R from S to \mathbf{R} by : $R = \{(x, y) : \log_e y = x \log_e (\frac{2}{5}), x \in S, y \in \mathbf{R}\}$

Then, the sum of all the elements in the range of R is equal to :

- (1) $\frac{10}{9}$ (2) $\frac{3}{2}$
(3) $\frac{5}{2}$ (4) $\frac{5}{3}$

Q20. If $\sin x + \sin^2 x = 1, x \in (0, \frac{\pi}{2})$, then

- $(\cos^{12} x + \tan^{12} x) + 3(\cos^{10} x + \tan^{10} x + \cos^8 x + \tan^8 x) + (\cos^6 x + \tan^6 x)$ is equal to :
(1) 4 (2) 1
(3) 3 (4) 2

Q21. If $24 \int_0^{\frac{\pi}{4}} (\sin |4x - \frac{\pi}{12}| + [2 \sin x]) dx = 2\pi + \alpha$, where $[\cdot]$ denotes the greatest integer function, then α is equal to _____.

Q22. Let $a_1, a_2, \dots, a_{2024}$ be an Arithmetic Progression such that

$a_1 + (a_5 + a_{10} + a_{15} + \dots + a_{2020}) + a_{2024} = 2233$. Then $a_1 + a_2 + a_3 + \dots + a_{2024}$ is equal to _____

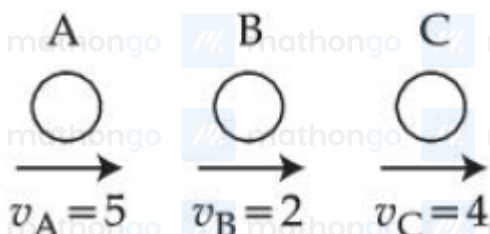
Q23. If $\lim_{t \rightarrow 0} \left(\int_0^1 (3x + 5)^t dx \right)^{\frac{1}{t}} = \frac{\alpha}{5e} \left(\frac{8}{5} \right)^{\frac{2}{3}}$, then α is equal to _____

Q24. Let $y^2 = 12x$ be the parabola and S be its focus. Let PQ be a focal chord of the parabola such that $(SP)(SQ) = \frac{147}{4}$. Let C be the circle described taking PQ as a diameter. If the equation of a circle C is $64x^2 + 64y^2 - \alpha x - 64\sqrt{3}y = \beta$, then $\beta - \alpha$ is equal to _____.

Q25. Let integers $a, b \in [-3, 3]$ be such that $a + b \neq 0$. Then the number of all possible ordered pairs (a, b) , for

which $\left| \frac{z-a}{z+b} \right| = 1$ and $\begin{vmatrix} z+1 & \omega & \omega^2 \\ \omega & z+\omega^2 & 1 \\ \omega^2 & 1 & z+\omega \end{vmatrix} = 1, z \in \mathbf{C}$, where ω and ω^2 are the roots of $x^2 + x + 1 = 0$, is equal to _____.

Q26. Given below are two statements. One is labelled as Assertion (A) and the other is labelled as Reason (R).



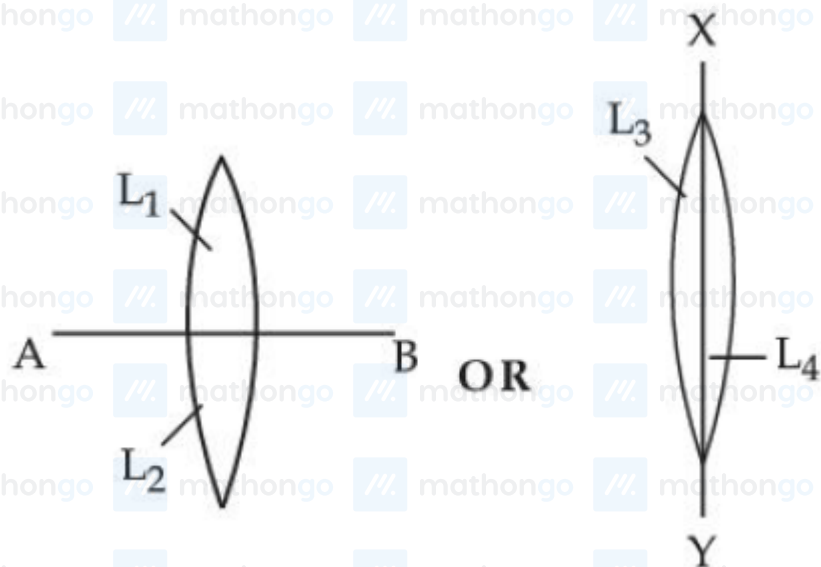
Assertion (A) :

Three identical spheres of same mass undergo one dimensional motion as shown in figure with initial velocities $v_A = 5$ m/s, $v_B = 2$ m/s, $v_C = 4$ m/s. If we wait sufficiently long for elastic collision to happen, then $v_A = 4$ m/s, $v_B = 2$ m/s, $v_C = 5$ m/s will be the final velocities. Reason (R): In an elastic collision

between identical masses, two objects exchange their velocities. In the light of the above statements, choose the correct answer from the options given below :

- (1) (A) is false but (R) is true (2) Both (A) and (R) are true but (R) is NOT the correct explanation of (A)
- (3) Both (A) and (R) are true and (R) is the correct explanation of (A) (4) (A) is true but (R) is false

Q27. Two identical symmetric double convex lenses of focal length f are cut into two equal parts L_1, L_2 by AB plane and L_3, L_4 by XY plane as shown in figure respectively. The ratio of focal lengths of lenses L_1 and L_3



is

- (1) 1:1 (2) 1:2
- (3) 1:4 (4) 2:1

Q28. Two bodies A and B of equal mass are suspended from two massless springs of spring constant k_1 and k_2 , respectively. If the bodies oscillate vertically such that their amplitudes are equal, the ratio of the maximum velocity of A to the maximum velocity of B is

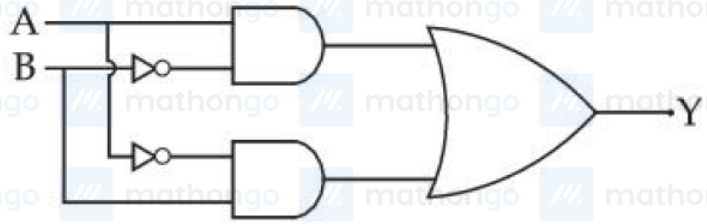
- (1) $\frac{k_1}{k_2}$ (2) $\sqrt{\frac{k_1}{k_2}}$
- (3) $\sqrt{\frac{k_2}{k_1}}$ (4) $\frac{k_2}{k_1}$

Q29. Given below are two statements. One is labelled as Assertion (A) and the other is labelled as Reason (R).

Assertion (A) : With the increase in the pressure of an ideal gas, the volume falls off more rapidly in an isothermal process in comparison to the adiabatic process. Reason (R) : In isothermal process, $PV = \text{constant}$, while in adiabatic process $PV^\gamma = \text{constant}$. Here γ is the ratio of specific heats, P is the pressure and V is the volume of the ideal gas. In the light of the above statements, choose the correct answer from the options given below :

- (1) Both (A) and (R) are true and (R) is the correct explanation of (A) (2) Both (A) and (R) are true but (R) is NOT the correct explanation of (A)
- (3) (A) is true but (R) is false (4) (A) is false but (R) is true

Q30.



The truth table for the circuit given below is :

(1)

A	B	Y
0	0	0
1	0	0
1	1	0
0	1	1

(3)

A	B	Y
0	0	0
1	0	1
0	1	0
1	1	0

(2)

A	B	Y
0	0	0
1	1	1
1	0	1
0	1	1

(4)

A	B	Y
0	0	0
0	1	1
1	0	1
1	1	0

Q31. The difference of temperature in a material can convert heat energy into electrical energy. To harvest the heat energy, the material should have

- (1) high thermal conductivity and high electrical conductivity (2) low thermal conductivity and low electrical conductivity
- (3) high thermal conductivity and low electrical conductivity (4) low thermal conductivity and high electrical conductivity

Q32.

List - I

List - II

- (A) Young's Modulus
(B) Torque
(C) Coefficient of Viscosity
(D) Gravitational Constant

- (I) $M L^{-1} T^{-1}$
(II) $M L^{-1} T^{-2}$
(III) $M^{-1} L^3 T^{-2}$
(IV) $M L^2 T^{-2}$

Match List - I with List - II.

Choose the correct answer from the options given below :

- (1) (A)-(I), (B)-(III), (C)-(II), (D)-(IV) (2) (A)-(IV), (B)-(II), (C)-(III), (D)-(I)
- (3) (A)-(II), (B)-(IV), (C)-(I), (D)-(III) (4) (A)-(II), (B)-(I), (C)-(IV), (D)-(III)

Q33. A sand dropper drops sand of mass $m(t)$ on a conveyer belt at a rate proportional to the square root of speed (v) of the belt, i.e. $\frac{dm}{dt} \propto \sqrt{v}$. If P is the power delivered to run the belt at constant speed then which of the following relationship is true?

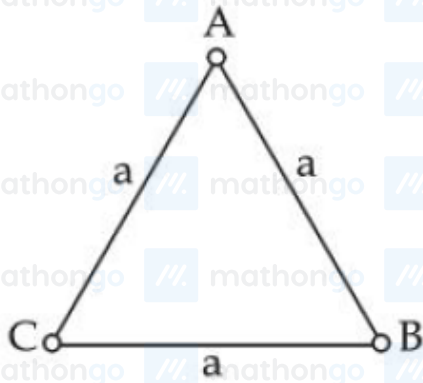
(1) $P \propto \sqrt{v}$

(3) $P^2 \propto v^5$

(2) $P \propto v$

(4) $P^2 \propto v^3$

Q34.



Three equal masses m are kept at vertices (A, B, C) of an equilateral triangle of side a in free space. At $t = 0$, they are given an initial velocity $\vec{V}_A = V_0 \vec{AC}$, $\vec{V}_B = V_0 \vec{BA}$ and $\vec{V}_C = V_0 \vec{CB}$. Here, \vec{AC} , \vec{CB} and \vec{BA} are unit vectors along the edges of the triangle. If the three masses interact gravitationally, then the magnitude of the net angular momentum of the system at the point of collision is :

(1) $3amV_0$

(2) $\frac{3}{2} a mV_0$

(3) $\frac{\sqrt{3}}{2} a mV_0$

(4) $\frac{1}{2} a mV_0$

Q35. The number of spectral lines emitted by atomic hydrogen that is in the 4th energy level, is

(1) 3

(2) 1

(3) 6

(4) 0

Q36. A convex lens made of glass (refractive index = 1.5) has focal length 24 cm in air. When it is totally immersed in water (refractive index = 1.33), its focal length changes to

(1) 24 cm

(2) 96 cm

(3) 48 cm

(4) 72 cm

Q37. In an experiment with photoelectric effect, the stopping potential,

(1) increases with increase in the intensity of the incident light

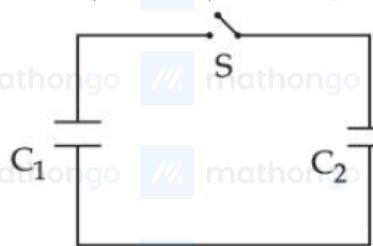
(2) decreases with increase in the intensity of the incident light

(3) increases with increase in the wavelength of the incident light

(4) is $\left(\frac{1}{e}\right)$ times the maximum kinetic energy of the emitted photoelectrons

Q38. A capacitor, $C_1 = 6\mu\text{F}$ is charged to a potential difference of $V_0 = 5\text{V}$ using a 5 V battery. The battery is removed and another capacitor, $C_2 = 12\mu\text{F}$ is inserted in place of the battery. When the switch 'S' is closed, the charge flows between the capacitors for some time until equilibrium condition is reached. What are the

charges (q_1 and q_2) on the capacitors C_1 and C_2 when equilibrium condition is reached.



(1) $q_1 = 10\mu\text{C}$, $q_2 = 20\mu\text{C}$

(2) $q_1 = 30\mu\text{C}$, $q_2 = 15\mu\text{C}$

(3) $q_1 = 20\mu\text{C}$, $q_2 = 10\mu\text{C}$

(4) $q_1 = 15\mu\text{C}$, $q_2 = 30\mu\text{C}$

Q39. A plane electromagnetic wave propagates along the $+x$ direction in free space. The components of the electric field, \vec{E} and magnetic field, \vec{B} vectors associated with the wave in Cartesian frame are

(1) E_x, B_y

(2) E_y, B_z

(3) E_z, B_y

(4) E_y, B_x

Q40. A cup of coffee cools from 90°C to 80°C in t minutes when the room temperature is 20°C . The time taken by the similar cup of coffee to cool from 80°C to 60°C at the same room temperature is :

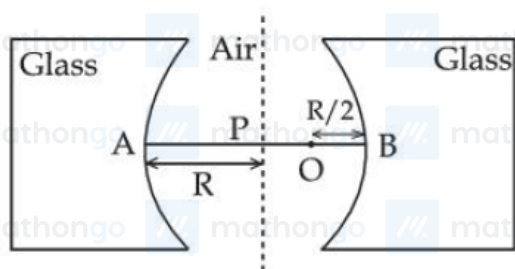
(1) $\frac{13}{10}t$

(2) $\frac{10}{13}t$

(3) $\frac{5}{13}t$

(4) $\frac{13}{5}t$

Q41.



Two concave refracting surfaces of equal radii of curvature and refractive index 1.5 face each other in air as shown in figure. A point object O is placed midway, between P and B . The separation between the images of O , formed by each refracting surface is :

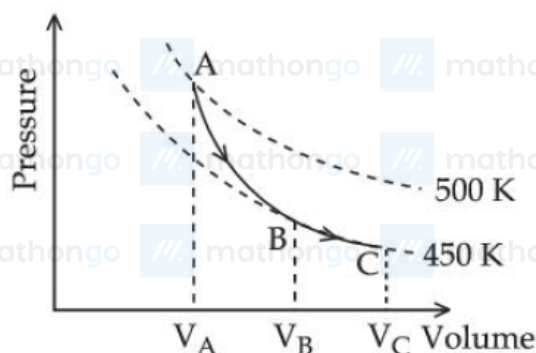
(1) $0.214 R$

(2) $0.411 R$

(3) $0.124 R$

(4) $0.114 R$

Q42.



A poly-atomic molecule ($C_V = 3R$, $C_P = 4R$, where R is gas constant) goes from phase space point A ($P_A = 10^5 \text{ Pa}$, $V_A = 4 \times 10^{-6} \text{ m}^3$) to point B ($P_B = 5 \times 10^4 \text{ Pa}$, $V_B = 6 \times 10^{-6} \text{ m}^3$) to point

C ($P_C = 10^4 \text{ Pa}$, $V_C = 8 \times 10^{-6} \text{ m}^3$). A to B is an adiabatic path and B to C is an isothermal path. The net heat absorbed per unit mole by the system is :

- (1) $500R(\ln 3 + \ln 4)$ (2) $450R(\ln 4 - \ln 3)$
 (3) $500R \ln 2$ (4) $400R \ln 4$

Q43. Match List - I with List - II.

List - I

- (A) Magnetic induction
 (B) Magnetic intensity
 (C) Magnetic flux
 (D) Magnetic moment

- (1) (A)-(I), (B)-(II), (C)-(III), (D)-(IV)
 (3) (A)-(III), (B)-(II), (C)-(I), (D)-(IV)

List - II

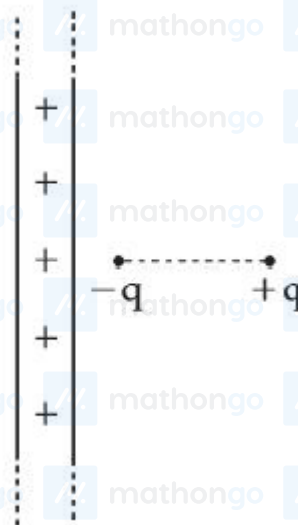
- (I) Ampere meter²
 (II) Weber
 (III) Gauss
 (IV) Ampere/meter

- (2) (A)-(III), (B)-(IV), (C)-(I), (D)-(II)
 (4) (A)-(III), (B)-(IV), (C)-(II), (D)-(I)

Q44. A point charge causes an electric flux of $-2 \times 10^4 \text{ Nm}^2 \text{ C}^{-1}$ to pass through a spherical Gaussian surface of 8.0 cm radius, centred on the charge. The value of the point charge is : (Given $\epsilon_0 = 8.85 \times 10^{-12} \text{ C}^2 \text{ N}^{-1} \text{ m}^{-2}$)

- (1) $15.7 \times 10^{-8} \text{ C}$ (2) $17.7 \times 10^{-8} \text{ C}$
 (3) $-15.7 \times 10^{-8} \text{ C}$ (4) $-17.7 \times 10^{-8} \text{ C}$

Q45. An electric dipole is placed at a distance of 2 cm from an infinite plane sheet having positive charge density σ_0 .



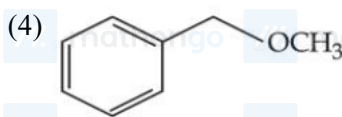
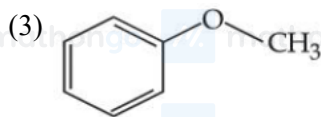
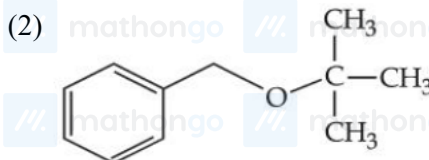
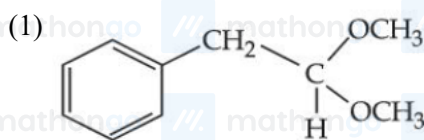
. Choose the correct option from the following.

- (1) Potential energy and torque both are maximum. (2) Torque on dipole is zero and net force is directed away from the sheet.
 (3) Torque on dipole is zero and net force acts towards the sheet. (4) Potential energy of dipole is minimum and torque is zero.

Q46. The magnetic field inside a 200 turns solenoid of radius 10 cm is $2.9 \times 10^{-4} \text{ Tesla}$. If the solenoid carries a current of 0.29 A, then the length of the solenoid is _____ $\pi \text{ cm}$.

Q47. A parallel plate capacitor consisting of two circular plates of radius 10 cm is being charged by a constant current of 0.15 A. If the rate of change of potential difference between the plates is $7 \times 10^8 \text{ V/s}$ then the integer value of the distance between the parallel plates is (Take, $\epsilon_0 = 9 \times 10^{-12} \frac{\text{F}}{\text{m}}$, $\pi = \frac{22}{7}$) _____ μm .

Q55. Which one of the following, with HBr will give a phenol?



Q56. Given below are two statements : Statement (I) : NaCl is added to the ice at 0°C , present in the ice cream box to prevent the melting of ice cream. Statement (II) : On addition of NaCl to ice at 0°C , there is a depression in freezing point. In the light of the above statements, choose the correct answer from the options given below :

- (1) Both Statement I and Statement II are false (2) Statement I is false but Statement II is true
(3) Statement I is true but Statement II is false (4) Both Statement I and Statement II are true

Q57. Match List - I with List - II :

List - I
Applications

- (A) Transistors
(B) Hearing aids
(C) Invertors
(D) Apollo space ship

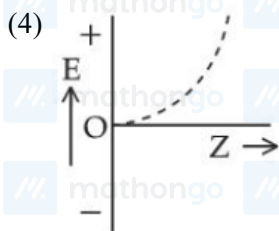
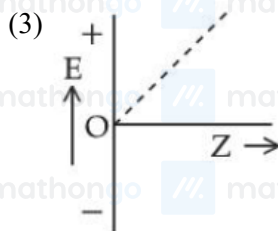
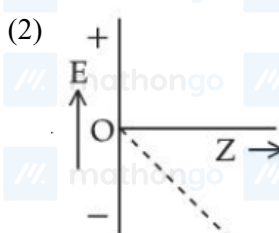
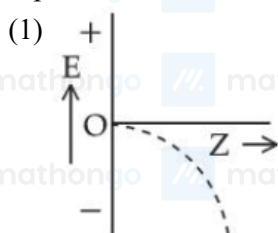
List - II
Batteries/Cell

- (I) Anode - Zn/Hg ; Cathode - $\text{HgO} + \text{C}$
(II) Hydrogen fuel cell
(III) Anode - Zn ; Cathode - Carbon
(IV) Anode - Pb ; Cathode - $\text{Pb}|\text{PbO}_2$

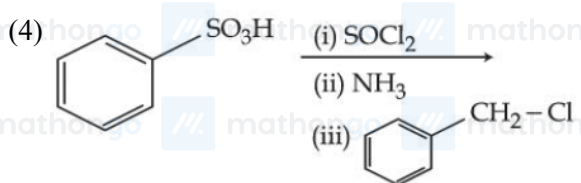
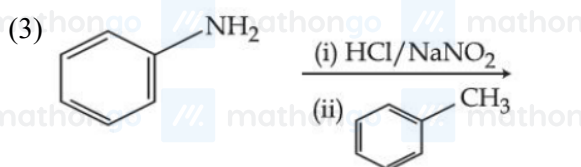
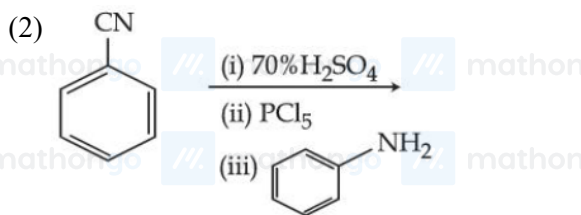
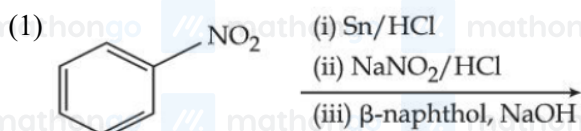
Choose the correct answer from the options given below :

- (1) (A)-(III), (B)-(II), (C)-(IV), (D)-(I) (2) (A)-(II), (B)-(III), (C)-(IV), (D)-(I)
(3) (A)-(III), (B)-(I), (C)-(IV), (D)-(II) (4) (A)-(IV), (B)-(III), (C)-(II), (D)-(I)

Q58. For hydrogen like species, which of the following graphs provides the most appropriate representation of E vs Z plot for a constant n ? [E: Energy of the stationary state, Z : atomic number, n = principal quantum number]



Q59. Which one of the following reaction sequences will give an azo dye?



Q60. Identify the essential amino acids from below : (A) Valine (B) Proline (C) Lysine (D) Threonine (E) Tyrosine

Choose the correct answer from the options given below :

- (1) (A), (C) and (E) only (2) (A), (C) and (D) only
(3) (C), (D) and (E) only (4) (B), (C) and (E) only

Q61. The calculated spin-only magnetic moments of $K_3[Fe(OH)_6]$ and $K_4[Fe(OH)_6]$ respectively are :

- (1) 3.87 and 4.90 B.M. (2) 4.90 and 5.92 B.M.
(3) 4.90 and 4.90 B.M. (4) 5.92 and 4.90 B.M.

Q62. The type of oxide formed by the element among Li, Na, Be, Mg, B and Al that has the least atomic radius is :

- (1) A_2O (2) A_2O_3
(3) AO_2 (4) AO

Q63. Total number of sigma (σ) and pi (π) bonds respectively present in hex-1-en-4-yne are :

- (1) 3 and 13 (2) 11 and 3
(3) 13 and 3 (4) 14 and 3


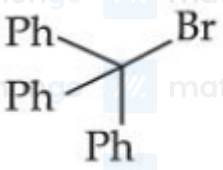
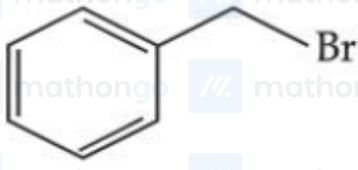
Q64. First ionisation enthalpy values of first four group 15 elements are given below. Choose the correct value for the element that is a main component of apatite family :

- (1) 1402 kJ mol^{-1} (2) 834 kJ mol^{-1}
(3) 1012 kJ mol^{-1} (4) 947 kJ mol^{-1}

Q65. Given below are two statements : Statement (I) : On nitration of m-xylene with HNO_3 , H_2SO_4 followed by oxidation, 4-nitrobenzene-1,3-dicarboxylic acid is obtained as the major product. Statement (II) : $-CH_3$ group is o/p-directing while $-NO_2$ group is m-directing group. In the light of the above statements, choose the correct answer from the options given below :

- (1) Both Statement I and Statement II are false
(2) Statement I is false but Statement II is true
(3) Statement I is true but Statement II is false
(4) Both Statement I and Statement II are true

Q66. Which among the following halides will generate the most stable carbocation in the nucleophilic substitution reaction?

- (1) 
- (2) 
- (3) 
- (4) 

Q67. Given below are two statements : Statement (I) : It is impossible to specify simultaneously with arbitrary precision, both the linear momentum and the position of a particle. Statement (II) : If the uncertainty in the measurement of position and uncertainty in measurement of momentum are equal for an electron, then the uncertainty in the measurement of velocity is $\geq \sqrt{\frac{h}{\pi}} \times \frac{1}{2m}$. In the light of the above statements, choose the correct answer from the options given below :

- (1) Statement I is false but Statement II is true
(2) Both Statement I and Statement II are false
(3) Both Statement I and Statement II are true
(4) Statement I is true but Statement II is false

Q68. 0.1 M solution of KI reacts with excess of H_2SO_4 and KIO_3 solutions. According to equation

$5\text{I}^- + \text{IO}_3^- + 6\text{H}^+ \rightarrow 3\text{I}_2 + 3\text{H}_2\text{O}$ Identify the correct statements : (A) 200 mL of KI solution reacts with 0.004 mol of KIO_3 (B) 200 mL of KI solution reacts with 0.006 mol of H_2SO_4 (C) 0.5 L of KI solution produced 0.005 mol of I_2 (D) Equivalent weight of KIO_3 is equal to $(\frac{\text{Molecular weight}}{5})$ Choose the correct answer from the options given below :

- (1) (A) and (D) only
(2) (C) and (D) only
(3) (B) and (C) only
(4) (A) and (B) only

Q69. Given below are two statements : Statement (I): In partition chromatography, stationary phase is thin film of liquid present in the inert support. Statement (II) : In paper chromatography, the material of paper acts as a stationary phase. In the light of the above statements, choose the correct answer from the options given below :

- (1) Statement I is true but Statement II is false
(2) Statement I is false but Statement II is true
(3) Both Statement I and Statement II are false
(4) Both Statement I and Statement II are true

Q70. If $\text{C}(\text{diamond}) \rightarrow \text{C}(\text{graphite}) + X\text{kJmol}^{-1}$ $\text{C}(\text{diamond}) + \text{O}_2(\text{g}) \rightarrow \text{CO}_2(\text{g}) + Y\text{kJmol}^{-1}$ $\text{C}(\text{graphite}) + \text{O}_2(\text{g}) \rightarrow \text{CO}_2(\text{g}) + Z\text{kJmol}^{-1}$ at constant temperature. Then

- (1) $X = -Y + Z$
(2) $-X = Y + Z$
(3) $X = Y + Z$
(4) $X = Y - Z$

Q71. In the sulphur estimation, 0.20 g of a pure organic compound gave 0.40 g of barium sulphate. The percentage of sulphur in the compound is $\text{_____} \times 10^{-1}\%$. (Molar mass : O = 16, S = 32, Ba = 137 in gmol^{-1})

Q72. Isomeric hydrocarbons \rightarrow negative Baeyer's test (Molecular formula C_9H_{12}) The total number of isomers from above with four different non-aliphatic substitution sites is -

Q73. Consider the following low-spin complexes $K_3[Co(NO_2)_6]$, $K_4[Fe(CN)_6]$, $K_3[Fe(CN)_6]$, $Cu_2[Fe(CN)_6]$ and $Zn_2[Fe(CN)_6]$ The sum of the spin-only magnetic moment values of complexes having yellow colour is. _____ B.M. (answer in nearest integer)

Q74. In the Claisen-Schmidt reaction to prepare, dibenzalacetone from 5.3 g of benzaldehyde, a total of 3.51 g of product was obtained. The percentage yield in this reaction was _____ %.

Q75. Total number of non bonded electrons present in NO_2^- ion based on Lewis theory is

ANSWER KEYS

1. (4)	2. (2)	3. (4)	4. (4)	5. (2)	6. (1)	7. (3)	8. (4)
9. (3)	10. (3)	11. (2)	12. (4)	13. (1)	14. (3)	15. (3)	16. (4)
17. (1)	18. (4)	19. (4)	20. (4)	21. (12)	22. (11132)	23. (64)	24. (1328)
25. (10)	26. (1)	27. (2)	28. (2)	29. (1)	30. (4)	31. (4)	32. (3)
33. (3)	34. (3)	35. (3)	36. (2)	37. (4)	38. (1)	39. (2)	40. (4)
41. (4)	42. (2)	43. (4)	44. (4)	45. (4)	46. (8)	47. (1320)	48. (8)
49. (3)	50. (7700)	51. (2)	52. (2)	53. (2)	54. (3)	55. (3)	56. (4)
57. (3)	58. (1)	59. (1)	60. (2)	61. (4)	62. (2)	63. (3)	64. (3)
65. (4)	66. (3)	67. (3)	68. (1)	69. (1)	70. (4)	71. (275)	72. (2)
73. (0)	74. (60)	75. (12)					